



Illinois Alternate Assessment

Sample Task Mathematics Grade 6

<ul style="list-style-type: none">• Present the primary task to the student. Say: Here are some circles and squares. What is the ratio of circles to squares?• Point to each option and say: 7 to 13, 7 to 20, 13 to 20 <p>The student receives a score of 4 for a correct response. If the student does not respond, repeat the primary task <i>only once</i> exactly as it appears. If the student responds correctly after the second presentation of the primary task, the student receives a score of 4. If the student chooses an incorrect answer or does not respond, move to Level 3.</p>	4
<ul style="list-style-type: none">• Turn the page to provide the general prompt.• Re-present the primary task and answer options. <p>The student receives a score of 3 for a correct response. If the student does not respond or responds incorrectly, move to Level 2.</p>	3
<ul style="list-style-type: none">• Indicate the correct answer and re-present the primary task and answer options. <p>The student receives a score of 2 for a correct response. If the student does not respond or responds incorrectly, move to Level 1.</p>	2
<p>If the student does not respond or responds incorrectly at Level 2, the student receives a score of 1.</p>	1

Correct answer: 7:13

Illinois Alternate Assessment



7:13

7:20



13:20

Illinois Alternate Assessment

- Say: **Here are some stars and hearts. The ratio of stars to hearts is 4 to 6.**
- Turn back to the primary task page and re-present the primary task and answer options.

3

Illinois Alternate Assessment



4:6